

Pre-Algebra
REVIEW for FINAL EXAM

1. What is the value of *? $\frac{6}{8} = \frac{*}{24}$

[A] 6

[B] 18

[C] 144

[D] 24

2. Write $4\frac{3}{4}$ as an improper fraction.

[A] $\frac{43}{4}$

[B] $\frac{19}{4}$

[C] $\frac{4}{19}$

[D] $\frac{4}{43}$

3. Write $\frac{38}{7}$ as a mixed number.

[A] $1\frac{5}{7}$

[B] $1\frac{6}{7}$

[C] $5\frac{7}{3}$

[D] $5\frac{3}{7}$

4. Multiply: $\frac{6}{5} \times \frac{5}{9}$

[A] $4\frac{1}{6}$

[B] $\frac{2}{3}$

[C] 1

[D] $\frac{11}{14}$

5. Divide: $2\frac{2}{7} \div 3\frac{3}{4}$

[A] $\frac{8}{21}$

[B] $\frac{3}{14}$

[C] $\frac{64}{105}$

[D] $8\frac{4}{7}$

6. Find the LCD: $\frac{3}{7}, \frac{10}{21}, \frac{1}{6}$

[A] 84

[B] 42

[C] 21

[D] 126

7. Add: $4\frac{1}{4} + 1\frac{1}{9}$

[A] $5\frac{2}{13}$

[B] 6

[C] $8\frac{3}{13}$

[D] $5\frac{13}{36}$

8. Subtract: $9 - 4\frac{1}{2}$

[A] $8\frac{1}{2}$

[B] $4\frac{1}{2}$

[C] $5\frac{1}{2}$

[D] $13\frac{1}{2}$

9. Simplify. $\left(\frac{2}{5} + \frac{1}{2}\right) \div \frac{1}{6}$

[A] $5\frac{2}{5}$

[B] $\frac{9}{20}$

[C] $\frac{3}{20}$

[D] $\frac{4}{15}$

10. Find the greatest common factor of 4 and 6.

[A] 4

[B] 2

[C] 3

[D] 1

11. Find the least common multiple of 20, 44, and 88.

[A] 880

[B] 220

[C] 440

[D] 330

12. Round 2.327 liters to the nearest tenth of a liter.


[A] 2.33 L

[B] 2.4 L

[C] 2.3 L

[D] 2.34 L

13. Write a decimal to estimate the amount of area shaded.



[A] 2.5

[B] 0.75

[C] 0.25

[D] 0.5

14. Write 0.45 as a reduced fraction.

[A] $\frac{45}{100}$

[B] $\frac{3}{10}$

[C] $\frac{9}{20}$

[D] $\frac{4}{5}$

15. Add: $7.92 + 5.95 + 7.54$

[A] 21.41

[B] 21.42

[C] 21.51

[D] 22.41

16. Solve: $x + 2.2 = 6.3$

- [A] 4.1 [B] 13.86 [C] 8.5 [D] 3.1

17. Simplify: $53.8 - 4.8 \cdot 0.21$

- [A] 10.29 [B] 10.311 [C] 52.792 [D] 51.792

18. Solve: $2.4 = 0.8y$

- [A] 3 [B] 4 [C] 0.3 [D] 19.2

19. Complete: 16 in. = _____ ft

- [A] 192 [B] $5\frac{1}{3}$ [C] $2\frac{2}{3}$ [D] $1\frac{1}{3}$

20. Complete: 50.4 mm = _____ cm

- [A] 5040 [B] 5.04 [C] 504 [D] 0.504

21. Convert 10 inches to centimeters.

- [A] 0.39 cm [B] 25.40 cm [C] 3.94 cm [D] 254.00 cm

22. Write the following phrase as a rate in lowest terms.

210 sales for 154 returns

- [A] $\frac{11 \text{ sales}}{15 \text{ returns}}$ [B] $\frac{15 \text{ sales}}{11 \text{ returns}}$ [C] $\frac{210 \text{ returns}}{154 \text{ sales}}$ [D] $\frac{30 \text{ returns}}{22 \text{ sales}}$

23. Which of the following is NOT equal to the ratio 12 to 20?

- [A] $\frac{5}{3}$ [B] 9:15 [C] $\frac{3}{5}$ [D] 3:5

24. Solve: $\frac{3}{6} = \frac{x}{24}$

- [A] 5 [B] 12 [C] 9 [D] 17

25. If 4 cans of apricots cost \$17.20, how many cans of apricots can be purchased with \$38.70?

- [A] 11 [B] 8 [C] 9 [D] 10

26. Write $2\frac{1}{4}\%$ as a decimal.

- [A] 0.0225 [B] 225 [C] 0.225 [D] 2.25

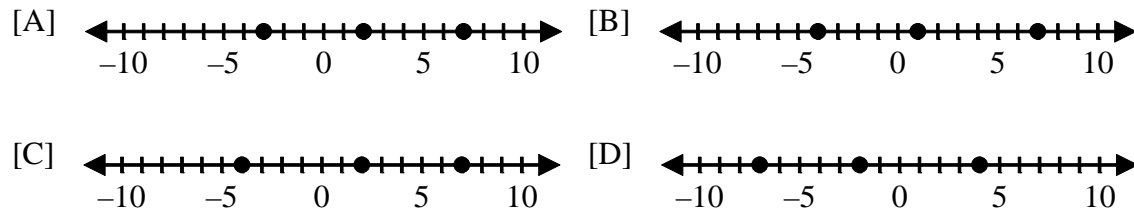
27. The regular price of a suit is \$105. It is on sale at 28% off. What is the sale price?

- [A] \$77.00 [B] \$75.60 [C] \$29.40 [D] \$28.00

28. What percent of 5 is 1?

- [A] $\frac{1}{20}\%$ [B] 0.2% [C] 5% [D] 20%

29. Which of the following number lines shows the graph of 7, 2, and -4 ?



30. Add: $(-6) + 4 + (-6)$

- [A] -8 [B] -4 [C] 8 [D] 16

31. Solve: $x - 2 = 6$

- [A] 4 [B] -4 [C] -8 [D] 8

32. Multiply: $(-3)(7)(-6)$

- [A] 126 [B] 2 [C] -2 [D] -126

33. Simplify: $(-10)^2$

- [A] -100 [B] 100 [C] -20 [D] 20

34. Simplify: $(18 + 7 \cdot 18 \div 7 - 15) \div 7$

- [A] 11 [B] -4 [C] 3 [D] 449

35. Simplify: $4x + 5(x + 4)$

[A] $-x + 20$ [B] $9x + 20$ [C] $9x + 4$ [D] $9x - 20$

36. Subtract: $(-7) - (-4)$

[A] -11 [B] -3 [C] 3 [D] 11

37. Simplify: $-(-5) - 5(9 - 8)$

[A] -32 [B] -10 [C] 0 [D] -58

38. Evaluate $a - b + c$ if $a = -7$, $b = -1$, and $c = -4$.

[A] -12 [B] -10 [C] -4 [D] -2

39. Evaluate $\frac{y}{2x} - z$ for $x = 2$, $y = 16$, and $z = 1$.

[A] 3 [B] 9 [C] -6 [D] 5

40. Multiply: $-4(x + 2)$

[A] $-4x + 8$ [B] $-4x - 2$ [C] $-4x - 8$ [D] $-4x + 2$

41. Simplify: $4x - 8y - 9x - 7y$

[A] $-5x - 15y$ [B] $13x - 15y$ [C] $-5x + y$ [D] $13x + y$

42. Which of the following is a solution of the equation $6x - 5 = -6$?

[A] -11 [B] -1 [C] $-\frac{1}{6}$ [D] $-\frac{11}{6}$

43. Solve: $5x - 3 = 37$

[A] 34 [B] 7 [C] 8 [D] 3

44. Solve: $\frac{x}{7} - \frac{x}{8} = 2$

[A] 1 [B] 56 [C] $7\frac{7}{15}$ [D] 112

45. Solve for s : $-6 = t + 5s$

- [A] $s = -6 - t - 5$ [B] $s = \frac{-6-t}{5}$ [C] $s = \frac{6+t}{5}$ [D] $s = -6 - 5t$

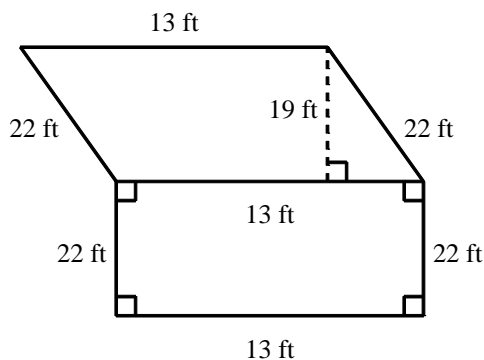
46. One side of a parallelogram has a length of 5.3 yards while another side has a length of 80.7 yards. What is the perimeter of the parallelogram?

- [A] 427.71 yd [B] 172 yd [C] 91.3 yd [D] 86 yd

47. Find the circumference of a circle whose radius is 3 inches. (Use $\pi \approx 3.14$)

- [A] 9.42 in. [B] 1.047 in. [C] 2.093 in. [D] 18.84 in.

48. Find the area of the region shown.

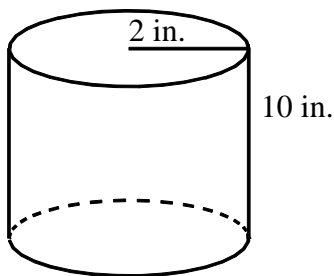


- [A] 114 ft^2 [B] 704 ft^2 [C] 533 ft^2 [D] 572 ft^2

49. Find the volume of a cube 5 inches on each side.

- [A] 30 in.^3 [B] 15 in.^3 [C] 125 in.^3 [D] 25 in.^3

50. Find the volume of the circular cylinder. (Use $V = \pi r^2 h$; $\pi \approx 3.14$)



- [A] 62.8 in.^2 [B] 125.6 in.^3 [C] 125.6 in.^2 [D] 62.8 in.^3

[1] [B]

[15] [A]

[29] [C]

[43] [C]

[2] [B]

[16] [A]

[30] [A]

[44] [D]

[3] [D]

[17] [C]

[31] [D]

[45] [B]

[4] [B]

[18] [A]

[32] [A]

[46] [B]

[5] [C]

[19] [D]

[33] [B]

[47] [D]

[6] [B]

[20] [B]

[34] [C]

[48] [C]

[7] [D]

[21] [B]

[35] [B]

[49] [C]

[8] [B]

[22] [B]

[36] [B]

[50] [B]

[9] [A]

[23] [A]

[37] [C]

[10] [B]

[24] [B]

[38] [B]

[11] [C]

[25] [C]

[39] [A]

[12] [C]

[26] [A]

[40] [C]

[13] [C]

[27] [B]

[41] [A]

[14] [C]

[28] [D]

[42] [C]
